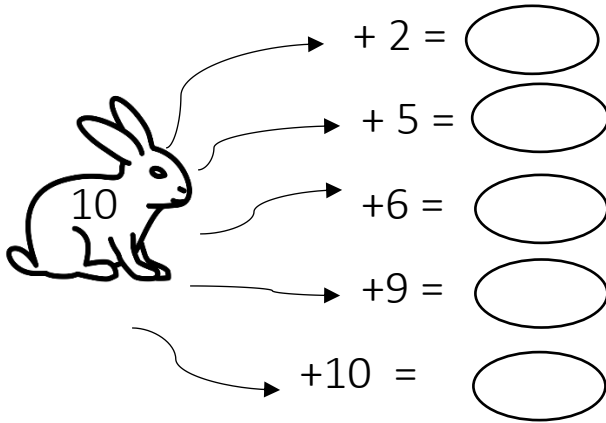


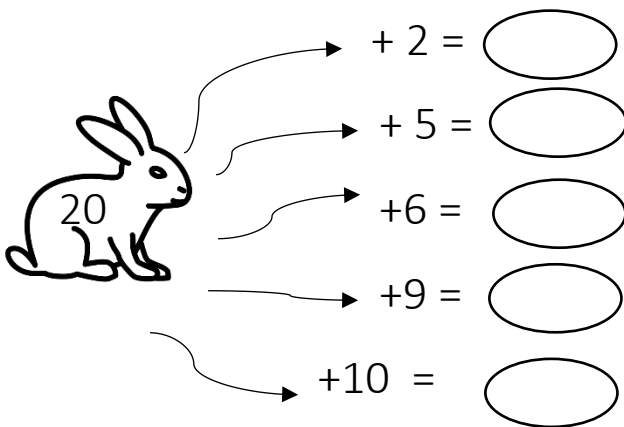
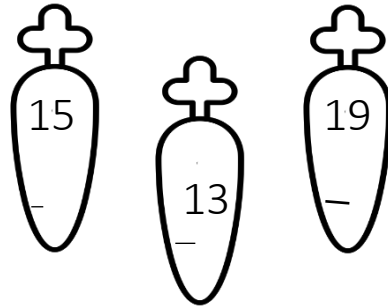
Nome: \_\_\_\_\_ Data: \_\_\_\_\_

1. Calcula e completa:



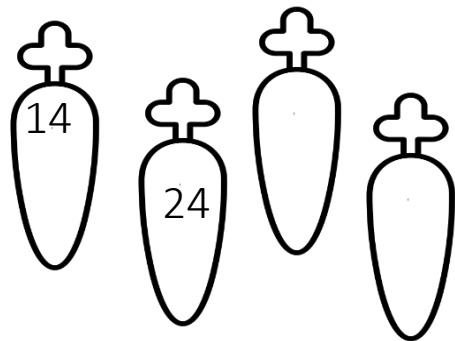
$+ 2 = \text{○}$   
 $+ 5 = \text{○}$   
 $+ 6 = \text{○}$   
 $+ 9 = \text{○}$   
 $+ 10 = \text{○}$

Pinta o maior número




$+ 2 = \text{○}$   
 $+ 5 = \text{○}$   
 $+ 6 = \text{○}$   
 $+ 9 = \text{○}$   
 $+ 10 = \text{○}$

Pinta os números pares



2. Divide os coelhos em 4 grupos e completa:



$\frac{1}{4} \times 12 = \underline{\quad}$

Porque

$\underline{\quad} + \underline{\quad} + \underline{\quad} + \underline{\quad} = 12$  ou

$4 \times \underline{\quad} = 12$

